











Name _____











Date _____

The ducks found some tasty fish to eat in the boxes!
Count up on the number path.



Write the missing numbers for the boxes that have a duck on top.

| | | | | | | | | | |
|-------|---|-------|---|-------|---|-------|---|-------|---|
| |  | |  | |  | |  | |  |
| 11 |  | 13 |  | 15 |  | 17 |  | 19 |  |
| _____ | _____ | _____ | _____ | _____ | _____ | _____ | _____ | _____ | _____ |

Write the missing numbers for the boxes that have a duck on top.

| | | | | | | | | | |
|---|-------|-------|-------|---|---|-------|-------|---|---|
|  | | | |  |  | | |  |  |
|  | 12 | 13 | 14 |  |  | 17 | 18 |  |  |
| _____ | _____ | _____ | _____ | _____ | _____ | _____ | _____ | _____ | _____ |

How many ducks do you count?



In the space below, draw 15 circles in rows.

In the space below, draw 12 squares in rows.