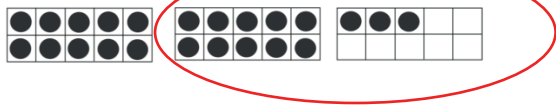


Name _____



Date _____

Find the Hidden Teen Number



Show each number on your Rekenrek with your partner. Write how many. Circle the teen number inside the big number. Draw a line from the big number to the teen number that hides inside it.




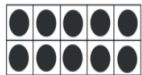
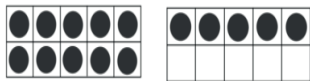
18



15



13



17



11



12